


GROUP MEMBERS: _____

Finding the Whole Workspace


Use the fractions below to model three different ways the whole could look.




If this is $\frac{1}{2}$,
what are three
ways the whole
could look?



If this is $\frac{1}{4}$,
what are three
ways the whole
could look?



If this is $\frac{1}{6}$,
what are three
ways the whole
could look?



If this is $\frac{1}{8}$,
what are three
ways the whole
could look?

